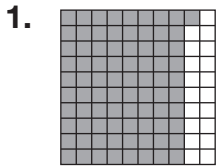
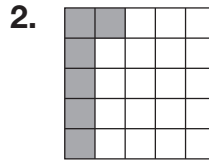
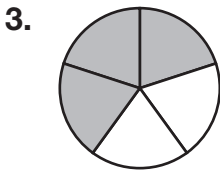


Understanding Percent

Write the percent of each figure that is shaded.

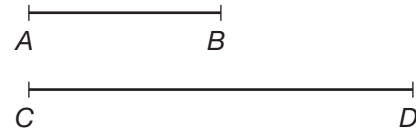









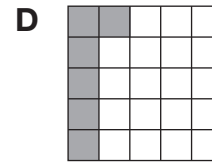
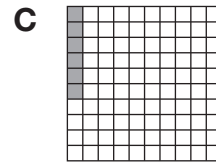
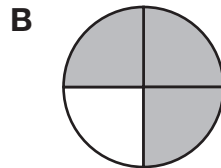
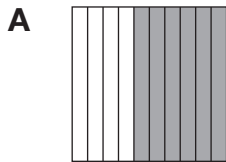
5. **Number Sense** What percent of line segment AB is equal to 50% of line segment CD ?



6. The line segment below shows 100%. Show 25%, 50%, and 75% of the segment.



7. Which of the following figures is 60% shaded?



8. **Writing to Explain** You are thirsty, so a friend has offered to give you 50% of his water. What information must you have in order to find out how much water your friend will give you?

